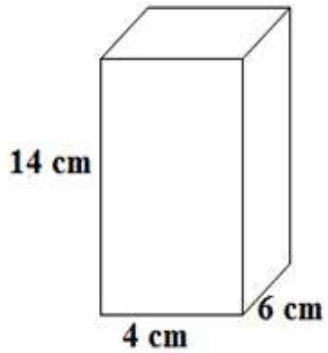


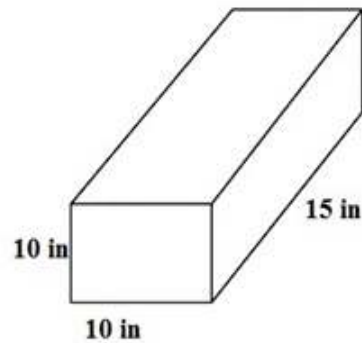
# Surface Area of Rectangular Prisms

worksheet 6

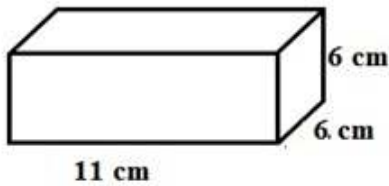
Find the surface area of each rectangular prism.



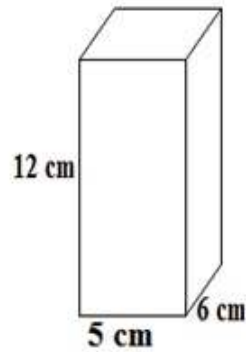
surface area = \_\_\_\_\_



surface area = \_\_\_\_\_



surface area =  
\_\_\_\_\_



surface area = \_\_\_\_\_