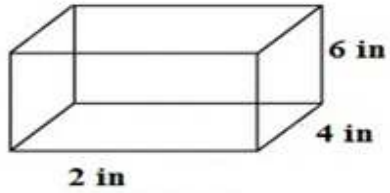


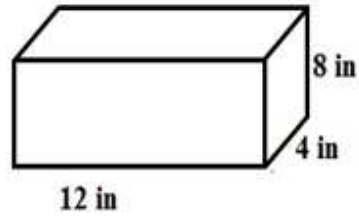
Surface Area of Rectangular Prisms

worksheet 5

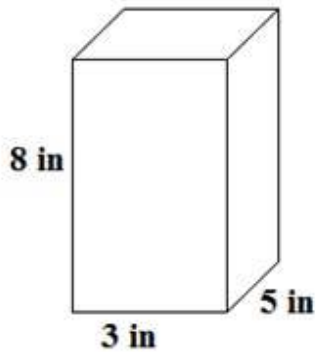
Find the surface area each rectangular prism.



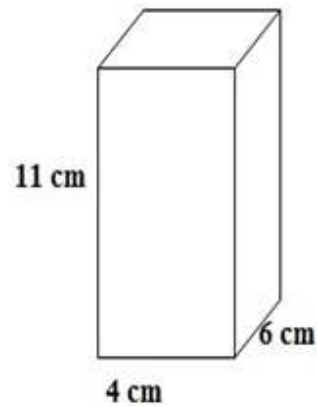
surface area = _____



surface area = _____



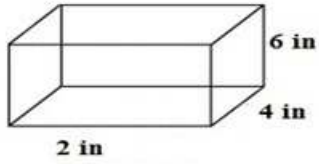
surface area = _____



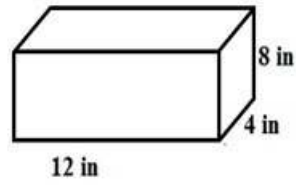
surface area = _____

Surface Area of Rectangular Prisms

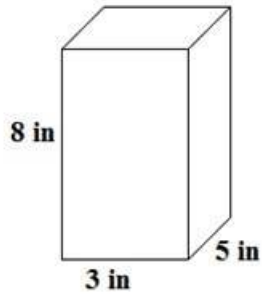
worksheet 5 answers



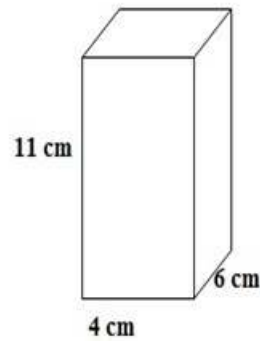
surface area = 112 sq. cm



surface area = 352 sq. cm



surface area = 158 sq. cm



surface area = 268 sq. cm